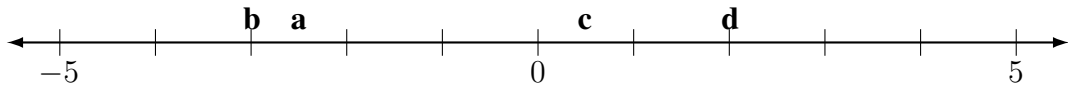
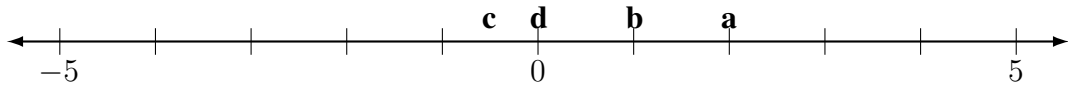


## Integers Worksheet 1 ANSWERS

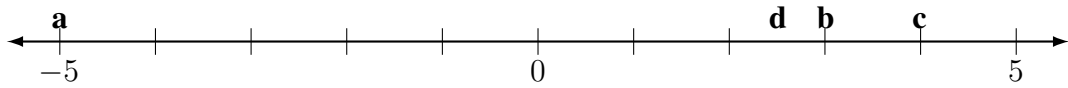
1.



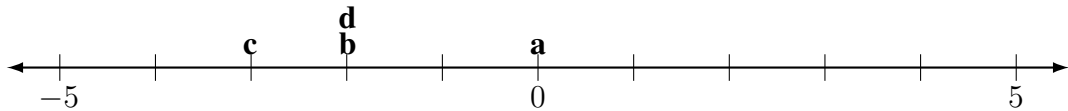
2.



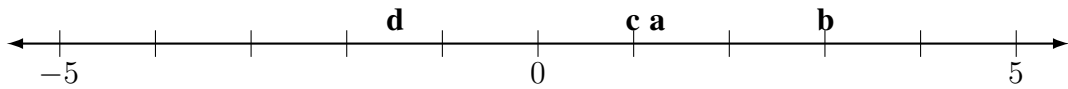
3.



4.



5.



6.  $-4 < -3$

7.  $2 > -2$

8.  $|-3| = 3$

9.  $(10 \div 2) > -5$

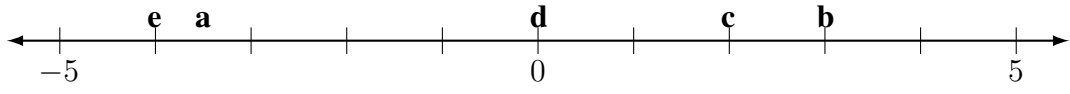
10.  $-3, -1\frac{1}{2}, 0, |-4|$

11.  $-\sqrt{9}, -2, -1.5, |1|$

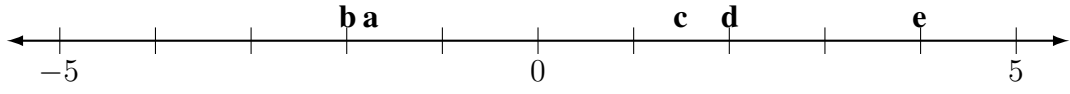
12.  $-2\frac{1}{2}, |1|, 4 \div 2, |-3|$

13.  $-\sqrt{4}, -|2|, |3|, \sqrt{16}$  OR  $-|2|, -\sqrt{4}, |3|, \sqrt{16}$

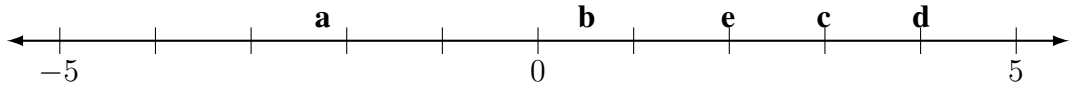
14.



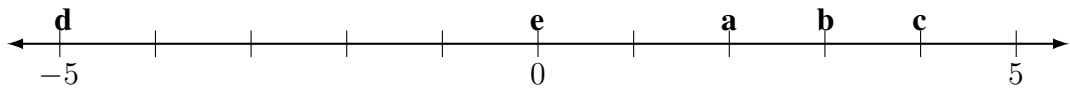
15.



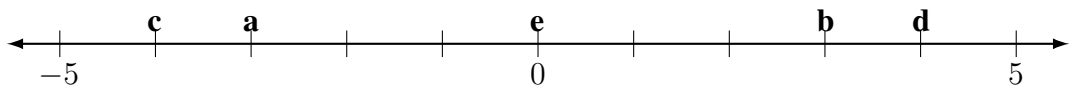
16.



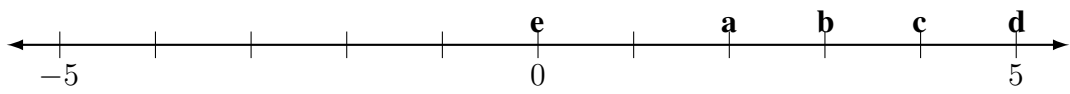
17.



18.



19.



20.

