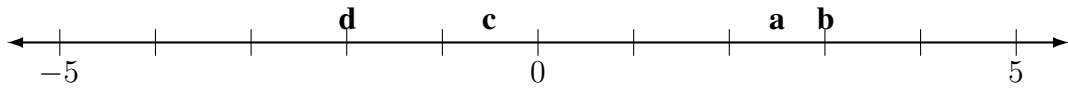
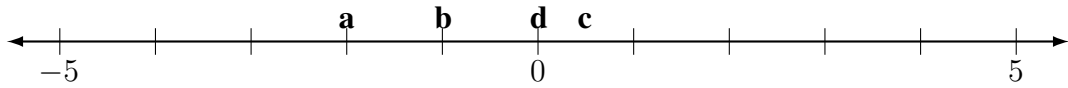


Integers Worksheet 7 ANSWERS

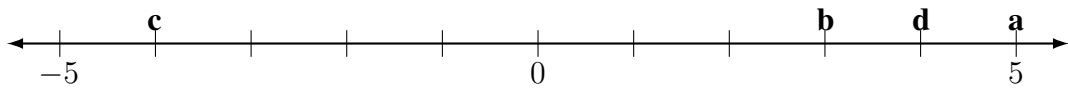
1.



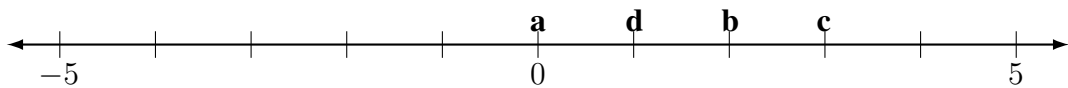
2.



3.



4.



5. $4 > 3$

6. $-4 < -3$

7. $-|-3| = -3$

8. $(-10 + 2) > -12$

9. $-|4|, 0, 1\frac{1}{2}, 3$

10. $-\sqrt{16}, -2, |-1|, 1.5$

11. -5

12. 3

13. 0

14. -1

15. 5

16. -2

17. 7

18. -16

19. -5

20. -13