

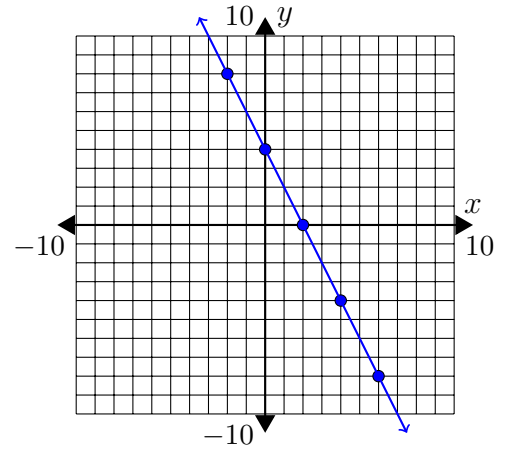
Graphing 1 Review WS Answers

1. (c)
2. (b)
3. (a)
4. (a)
5. (b)
6. (a)
7. (d)
8. (b)
9. (a)
10. (b)
11. (b)
12. (d)
13. (a)
14. (c)

15.

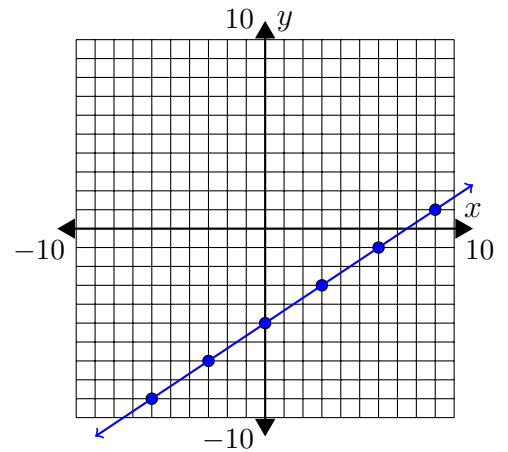
(a) $y = -2x + 4$

x	y
-6	16
-4	12
-2	8
0	4
2	0
4	-4
6	-8

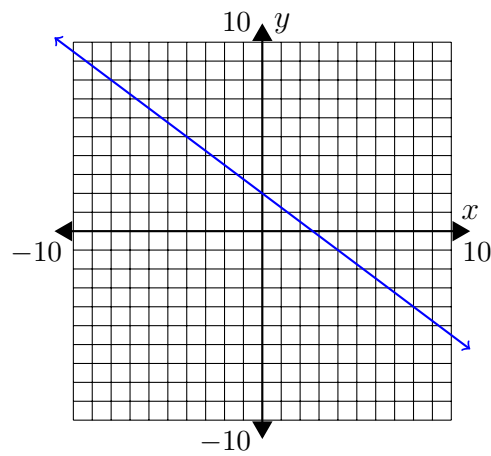


(b) $y = \frac{2}{3}x - 5$

x	y
-9	-11
-6	-9
-3	-7
0	-5
3	-3
6	-1
9	1

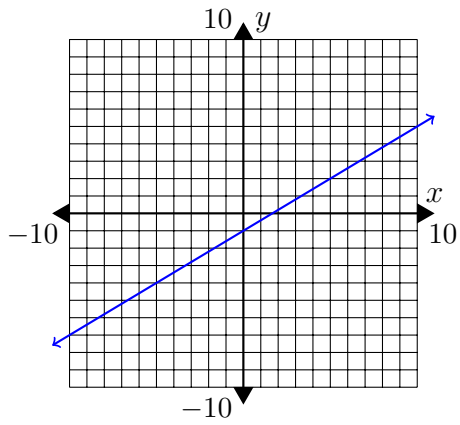


16.

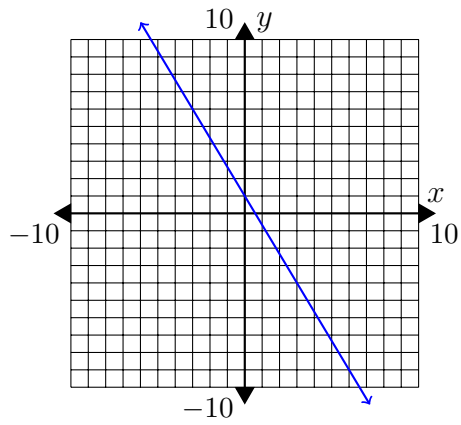


17.

(a)

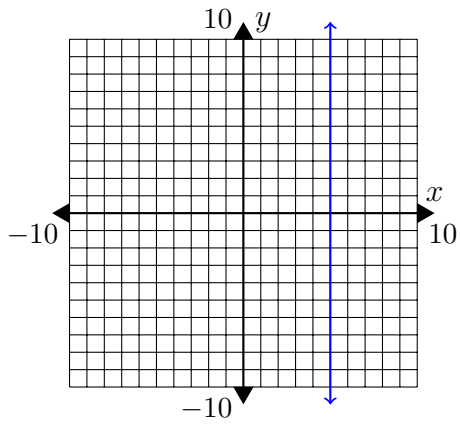


(b)

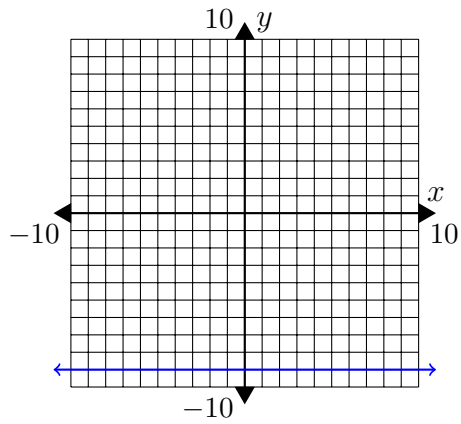


18.

(a)



(b)



19.

(a) $y = 2x - 3$

(b) $y = -\frac{1}{3}x + 2$

(c) $y = \frac{1}{3}x + 3$

