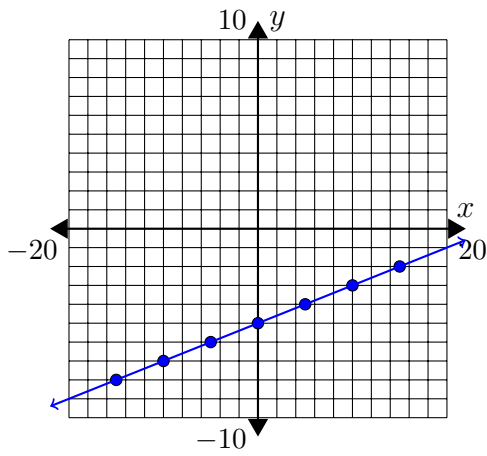


Graphing Worksheet 5 Answers

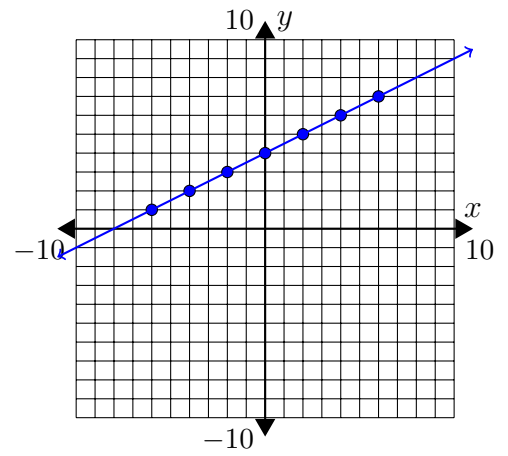
1. $y = \frac{1}{5}x - 5$

x	y
-15	-8
-10	-7
-5	-6
0	-5
5	-4
10	-3
15	-2



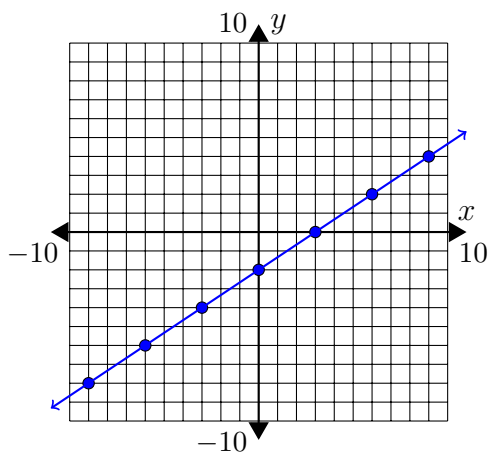
2. $y = \frac{1}{2}x + 4$

x	y
-6	1
-4	2
-2	3
0	4
2	5
4	6
6	7



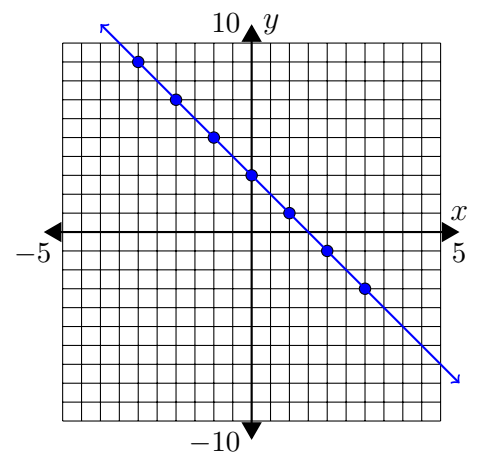
3. $y = \frac{2}{3}x - 2$

x	y
-9	-8
-6	-6
-3	-4
0	-2
3	0
6	2
9	4



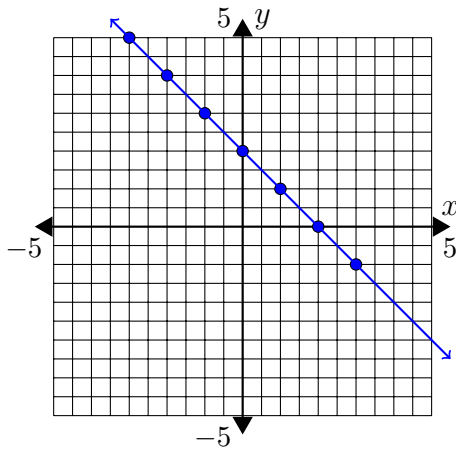
4. $y = -2x + 3$

x	y
-3	9
-2	7
-1	5
0	3
1	1
2	-1
3	-3



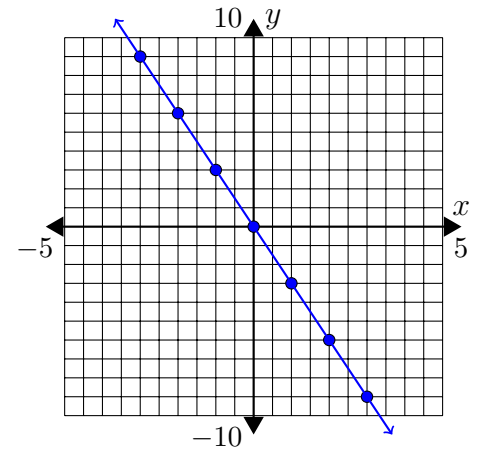
5. $y = -x + 2$

x	y
-3	5
-2	4
-1	3
0	2
1	1
2	0
3	-1



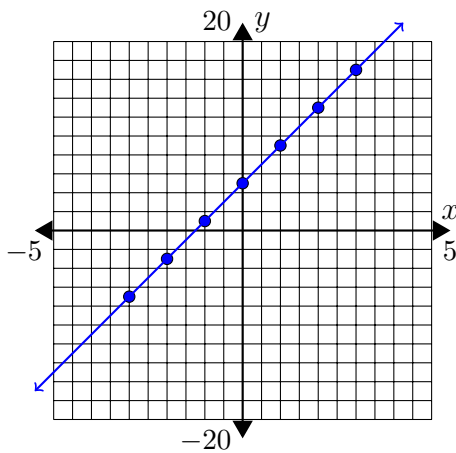
6. $y = -3x$

x	y
-3	9
-2	6
-1	3
0	0
1	-3
2	-6
3	-9



7. $y = 4x + 5$

x	y
-3	-7
-2	-3
-1	1
0	5
1	9
2	13
3	17



8. $y = 7x - 7$

x	y
-3	-28
-2	-21
-1	-14
0	-7
1	0
2	7
3	14

