

Graphing Worksheet 23 Answers

1. $x = -7$

2. $y = \frac{4}{3}x + 14$

3. $y = -3x - 28$

4. $y = \frac{5}{4}x + \frac{5}{4}$

5. $y = 7x + 68$

6. $y = -4x + 30$

7. $y = \frac{5}{7}x - \frac{15}{7}$

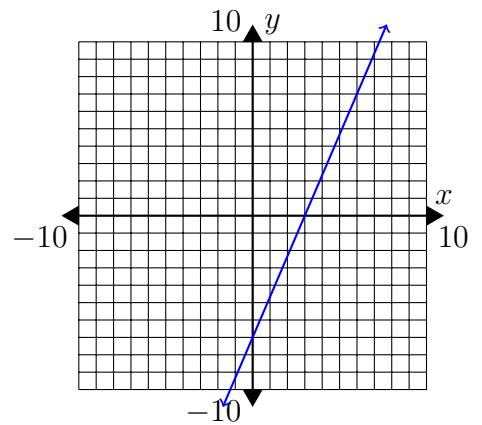
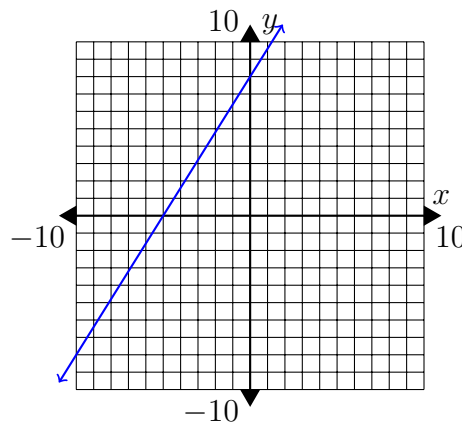
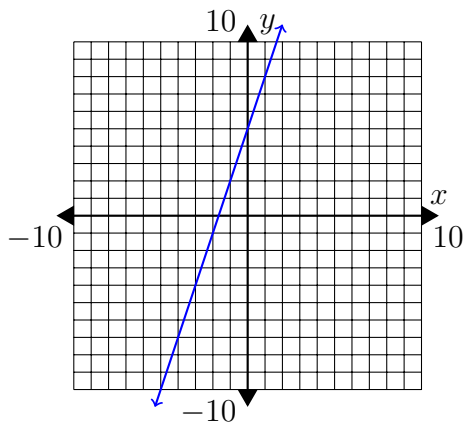
8. $y = -\frac{2}{5}x - \frac{22}{5}$

9. $y = -\frac{5}{2}x - \frac{3}{2}$

10. $y = 3x + 5$

11. $y = \frac{8}{5}x + 8$

12. $y = \frac{7}{3}x - 7$



13. $y = -x + 9$

14. $y = \frac{9}{10}x + 3$

15. $y = -\frac{5}{2}x - 4$

