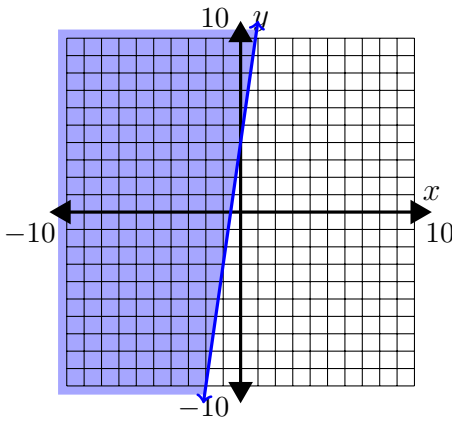
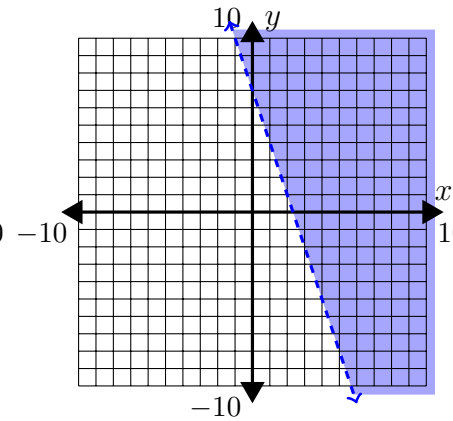


Graphing 3 Review WS Answers

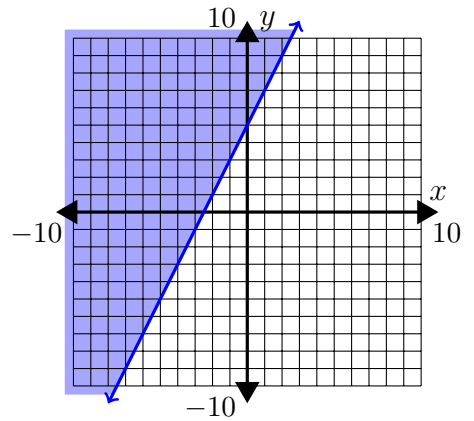
1. $y \geq 7x + 4$



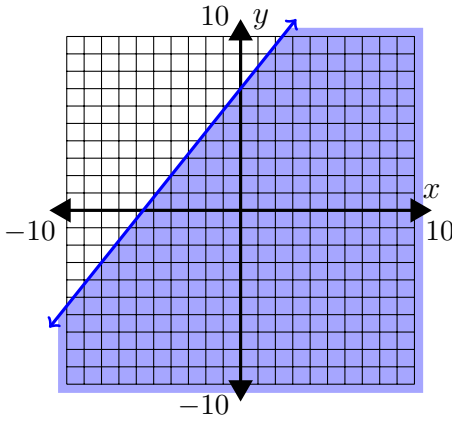
2. $y > -3x + 7$



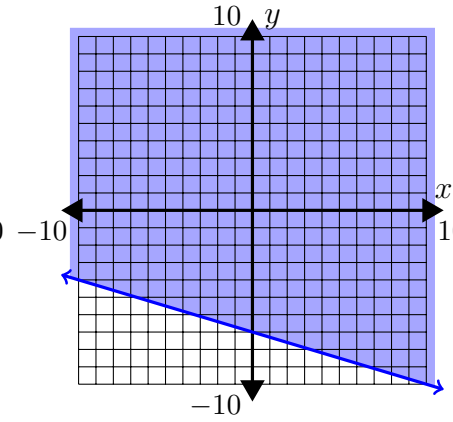
3. $y \geq 2x + 5$



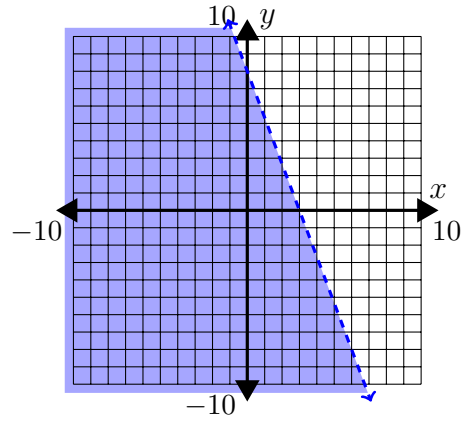
4. $y \leq \frac{5}{4}x + 7$



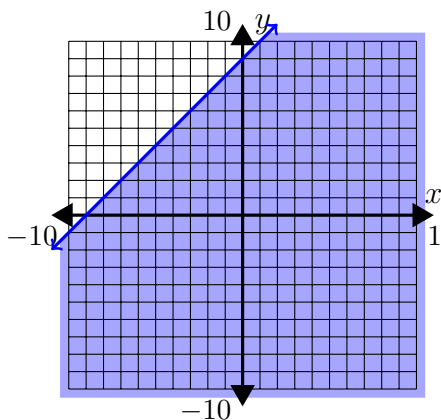
5. $y \geq -\frac{3}{10}x - 7$



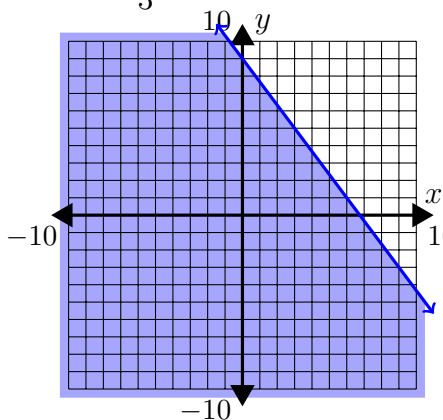
6. $y < -\frac{8}{3}x + 8$



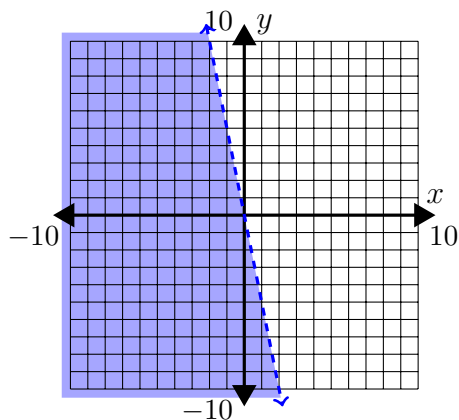
7. $y \leq x + 9$



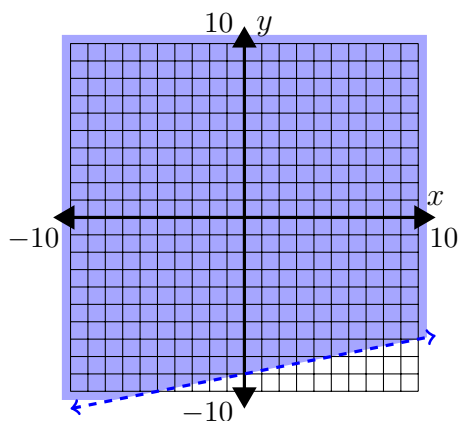
8. $y \leq -\frac{4}{3}x + 9$



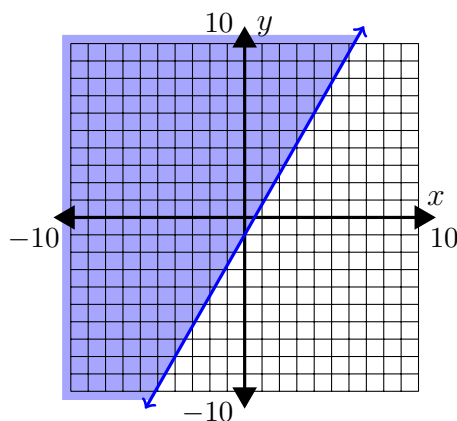
9. $y < -5x$



10. $y > \frac{1}{5}x - 9$



11. $y \geq \frac{7}{4}x - 1$



(a) (0, 0) - Yes

(b) (9, -2) - Yes

(c) (-3, -4) - Yes

(d) (10, -7) - No

(a) (0, 0) - Yes

(b) (0, -1) - Yes

(c) (8, -6) - No

(d) (-5, -7) - Yes

12. $y = -2x + 10$

13. $y \leq \frac{5}{2}x$

14. $y = -\frac{3}{4}x - 6$

15. $x \leq -6$

16. $y \geq -\frac{1}{9}x - 10$

17. $y < -\frac{2}{5}x + 2$

18. $y > \frac{7}{2}x - 10$

19. $y < \frac{1}{3}x + 4$

20. $y \geq 7$